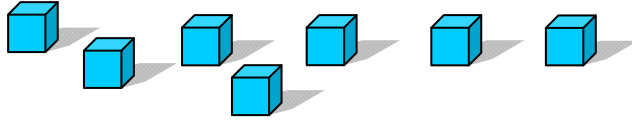


Assessment Test for Singapore Primary Mathematics 1A Standards Edition

This test covers material taught in Primary Mathematics 1A, Standards Edition
(<http://www.singaporemath.com/>)

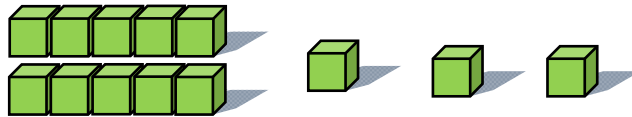
1. Write the number of blocks there are in the box.

(a)



[1]

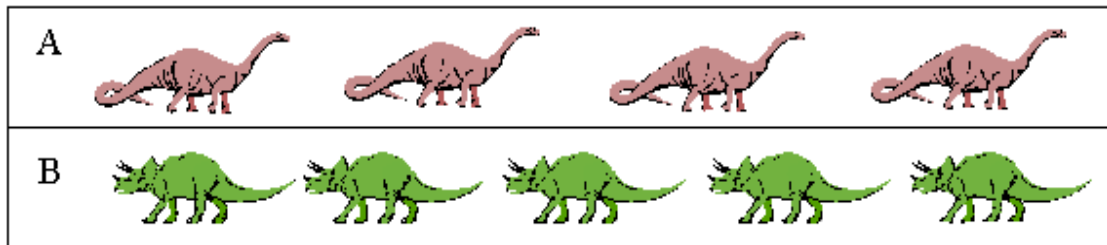
(b)



[1]

2. Which set has more? Circle A or B.

[2]



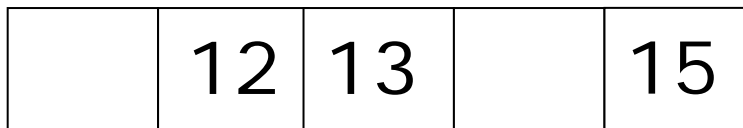
3. Fill in the missing numbers.

(a)



[2]

(b)



[2]

4. Write these as numbers.

(a) six _____

(b) eight = _____

[2]

(c) fourteen = _____

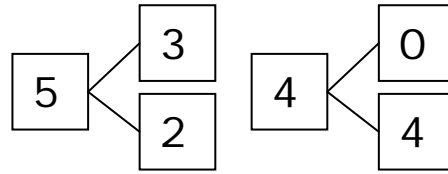
(d) twenty = _____

[2]

Copyright © 2008 [SingaporeMath.com Inc.]. All rights reserved.

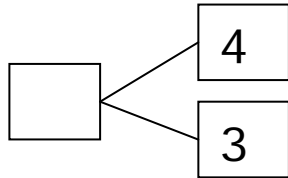
This assessment test and answer key may be printed out and used by individuals at no cost. They may not be copied or incorporated into any other document. Please see legal (<http://www.singaporemath.com/terms.asp>) for more information.

5. 5, 3, and 2 make a number bond.
4, 0, and 4 also make a number bond.

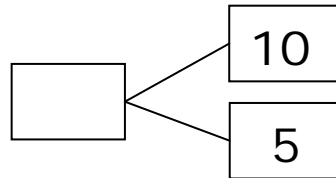


Write the missing number for the number bonds.

(a)

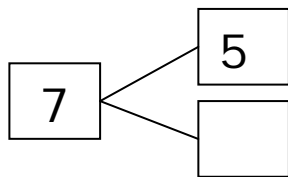


(b)

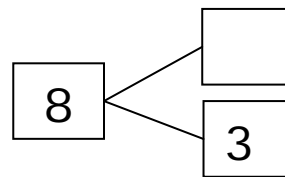


[2]

(c)



(d)



[2]

6. Write 3 more addition or subtraction sentences.

[3]

$\boxed{4} + \boxed{3} = \boxed{7}$	$\boxed{} - \boxed{} = \boxed{}$
$\boxed{} + \boxed{} = \boxed{}$	$\boxed{} - \boxed{} = \boxed{}$

7. Fill in the blanks.

(a) $0 + 6 = \underline{\hspace{2cm}}$

(b) $7 + 2 = \underline{\hspace{2cm}}$

[2]

(c) $5 + 4 = \underline{\hspace{2cm}}$

(d) $9 - 6 = \underline{\hspace{2cm}}$

[2]

(e) $10 - 4 = \underline{\hspace{2cm}}$

(f) $8 - 3 = \underline{\hspace{2cm}}$

[2]

(g) $7 + \underline{\hspace{2cm}} = 10$

(h) $10 - \underline{\hspace{2cm}} = 5$

[2]

8. Write the answer.

-
- (a) Mary used 4 eggs to bake a cake and 2 eggs to bake cookies. [4]
How many eggs did she use?

She used _____ eggs.

-
- (b) There are 6 balls. 3 of them are red. The rest are blue. How [4]
many are blue?

There are _____ blue balls.

-
- (c) Pat lost 3 balloons to the wind. She had 6 balloons left. How [4]
many balloons did she have at first?

She had _____ balloons.

9. Look at these letters.

A B C D E F G H I J K

- (a) Which letter is third? _____ [1]


- (b) Which letter is second from the right? _____ [2]

Copyright © 2008 [SingaporeMath.com Inc.]. All rights reserved.

This assessment test and answer key may be printed out and used by individuals at no cost. They may not be copied or incorporated into any other document. Please see legal (<http://www.singaporemath.com/terms.asp>) for more information.


10.

[7]



Match:

- (a) The _____ is above the box. ●
- (b) The _____ is in the box. ●
- (c) The _____ is behind the box. ●
- (d) The _____ is under the box. ●
- (e) The _____ is in front of the box. ●
- (f) The _____ is to the left of the box. ●
- (g) The _____ is to the right of the box. ●



11. Fill in the blanks.

- (a) What number comes after twelve? _____ [1]
- (b) What number comes before nineteen? _____ [1]
- (c) $10 + 5 =$ _____ [1]
- (d) _____ $+ 3 = 13$ [1]
- (e) Which is greater, 14 or 17? _____ [1]

Copyright © 2008 [SingaporeMath.com Inc.]. All rights reserved.

This assessment test and answer key may be printed out and used by individuals at no cost. They may not be copied or incorporated into any other document. Please see legal (<http://www.singaporemath.com/terms.asp>) for more information.

12. Write + or – in each \bigcirc

(a) $10 \bigcirc 3 = 7$

(b) $8 \bigcirc 5 = 13$ [2]

(c) $10 \bigcirc 3 = 13$

(d) $13 \bigcirc 8 = 5$ [2]

13. Fill in the blanks

(a) $13 + 2 = \underline{\quad}$

(b) $7 + 5 = \underline{\quad}$ [4]

(c) $6 + \underline{\quad} = 12$

(d) $4 + 9 = \underline{\quad}$ [4]

(e) $18 - 5 = \underline{\quad}$

(f) $13 - 9 = \underline{\quad}$ [4]

(g) $16 - 4 = \underline{\quad}$

(h) $15 - 7 = \underline{\quad}$ [4]

14. Write a number sentence to solve these problems. Then fill in the blank.

(a) Mary has 7 stickers. Pam has 8 more than Mary. How many stickers does Pam have? [4]

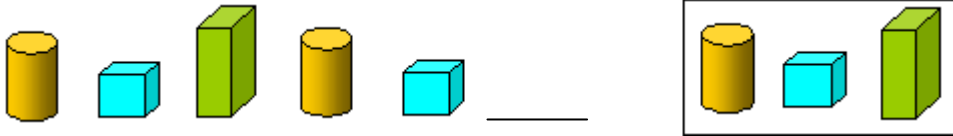
Pam has $\underline{\quad}$ stickers.

(b) Sally needs 15 balloons for a party. She has 11 balloons now. How many more balloons does she need? [4]

She needs $\underline{\quad}$ more balloons.

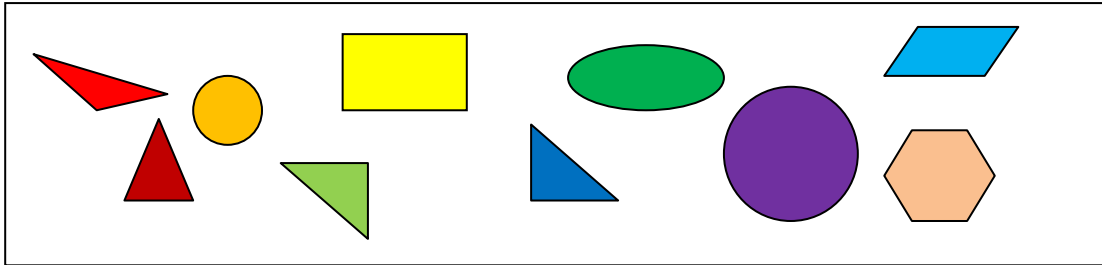
15. Circle the one in the box that comes next.

[2]



16.

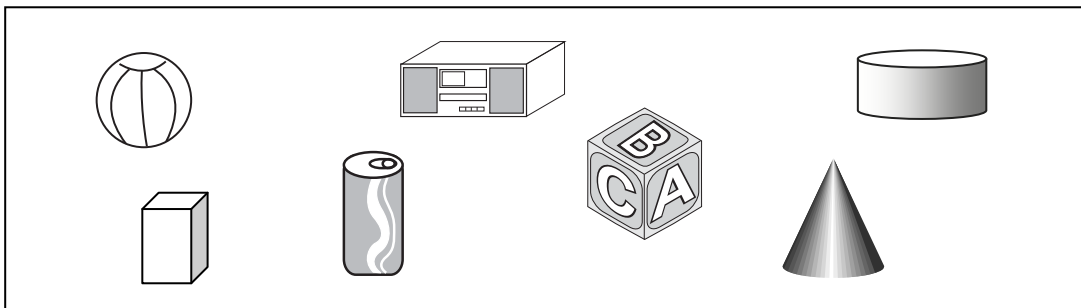
[5]



- (a) How many circles are there? _____
- (b) How many triangles are there? _____
- (c) How many rectangles are there? _____
- (d) How many shapes have 4 corners? _____
- (e) Circle two shapes that together would form a square.

17.

[3]

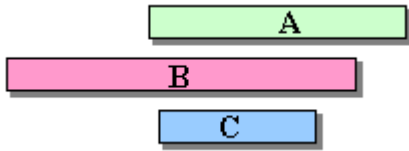


- (a) Circle the shapes that we can roll.
- (b) Cross out the shapes that we can stack.
- (c) Color the shapes that have only 2 flat surfaces.

Copyright © 2008 [SingaporeMath.com Inc.]. All rights reserved.

This assessment test and answer key may be printed out and used by individuals at no cost. They may not be copied or incorporated into any other document. Please see legal (<http://www.singaporemath.com/terms.asp>) for more information.

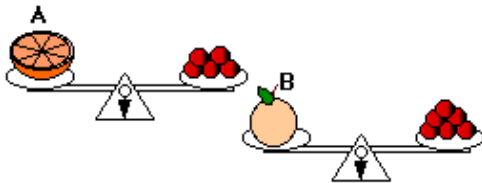
18. Which is longest, A, B, or C? _____ [2]



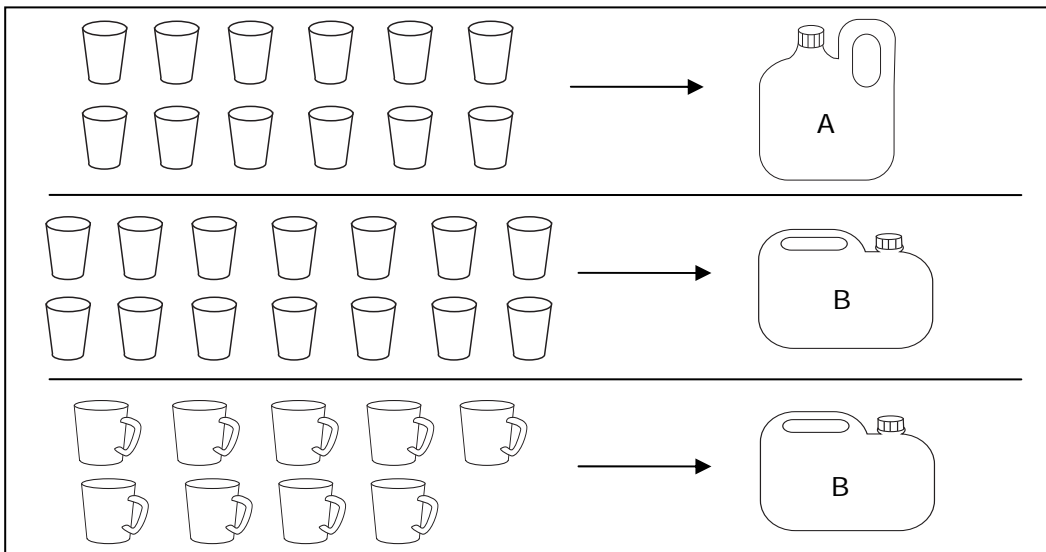
19. The paper clip is a unit. The pencil is _____ units long. [1]



20. Which is heavier, A or B? _____ [2]



21. [2]



This picture shows how many cups or mugs are used to fill up each jug, A and B. Circle the correct answer.

(a) Which holds more water, Jug A or Jug B? A B

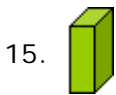
(b) Which can hold more water?  

Answer Key

1. (a) 7 (b) 13
 2. B
 3. (a) 8, 5 (b) 11, 14
 4. (a) 6 (b) 8
 (c) 14 (d) 20
 5. (a) 7 (b) 15
 (c) 2 (d) 5
 6. $3 + 4 = 7$, $7 - 3 = 4$; $7 - 4 = 3$
 7. (a) 6 (b) 9
 (c) 9 (d) 3
 (e) 6 (f) 5
 (g) 3 (h) 5
 8. (a) 6
 (b) 3
 (c) 9
 9. (a) C (b) J

10. (a) The _____ is above the box. ●
 (b) The _____ is in the box. ●
 (c) The _____ is behind the box. ●
 (d) The _____ is under the box. ●
 (e) The _____ is in front of the box. ●
 (f) The _____ is to the left of the box. ●
 (g) The _____ is to the right of the box. ●

11. (a) 13 (b) 18
 (c) 15 (d) 10
 (e) 17
 12. (a) - (b) +
 (c) + (d) -
 13. (a) 15 (b) 12
 (c) 6 (d) 13
 (e) 13 (f) 4
 (g) 12 (h) 8
 14. (a) $7 + 8 = 15$; 15
 (b) $15 - 11 = 4$; 4



16. (a) 2 (b) 4
 (c) 1 (d) 2
 (e)
17. (a) circle ball, cone, can, cylinder
 (b) cross out radio, box, block, can, cylinder
 (c) color the can and the cylinder
18. B
 19. 8
 20. B
 21. (a) B
 (b)