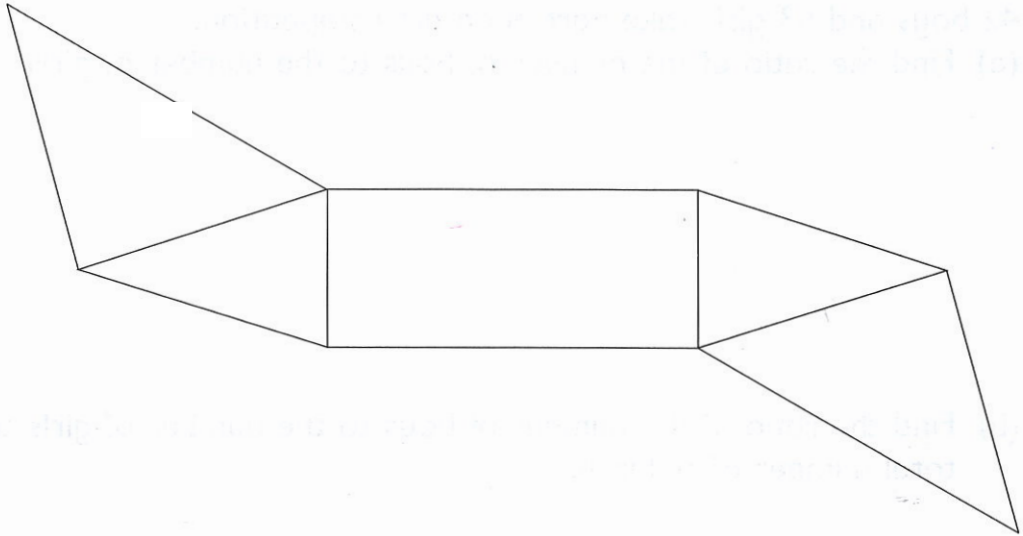


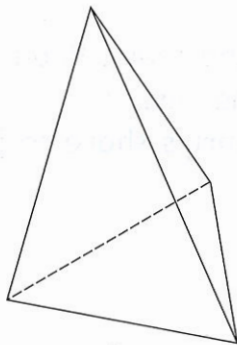
3. Meihua bought 3 T-shirts at $\$n$ each.
- (a) Express the total cost of the T-shirts in terms of n .
- (b) If $n = 8$, find the total cost of the T-shirts.
- (c) If $n = 10$, find the total cost of the T-shirts.
-

4. The total height of 4 girls is w cm.
- (a) Express their average height in terms of w .
- (b) If $w = 592$, find the average height of the girls.
- (c) If $w = 608$, find the average height of the girls.

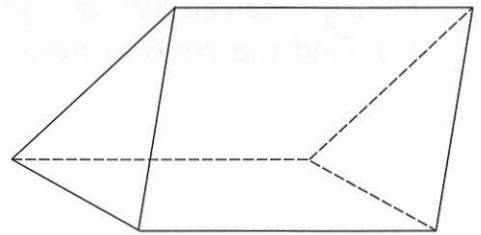
3. This is a net of a solid.



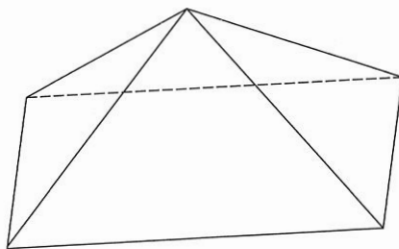
Which one of the following solids can be formed by the net? Circle the letter below it.



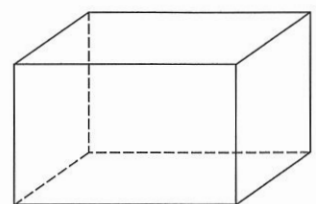
A



B



C



D

EXERCISE 30

1. Meihua jogged for $\frac{1}{2}$ hour at 6 km/h. She jogged for another $\frac{1}{4}$ hour at 8 km/h. What distance did she jog altogether?

-
2. In a 9-km walkathon, Susan walked at an average speed of 6 km/h for the first 3 km and at an average speed of 4 km/h for the remaining distance. How much time did she take for the walkathon?

22. Lacey had \$10 more than Hannah. Lacey spent all her money on 12 plates while Hannah used all her money to buy 8 cups at \$1.65 each and 4 plates. Find the cost of 1 plate.

-
23. John, David and Ben shared a sum of money. John received $\frac{1}{3}$ of the sum of money. David received twice as much money as Ben. If John received \$36, how much money did Ben receive?