

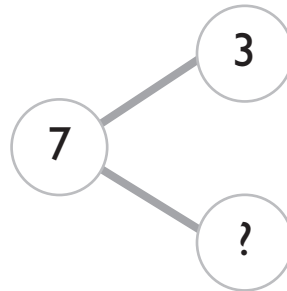
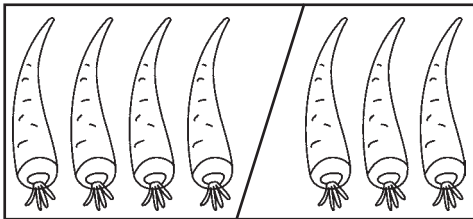
**Test  
B****Unit 2: Number Bonds****Chapter 1: Making Number Stories**

Circle the correct option, **A**, **B**, **C** or **D**.

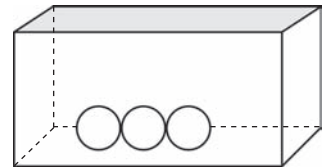
1. ● ● ● ● and ● ● make \_\_\_\_\_.

**A** 3**C** 6**B** 5**D** 7

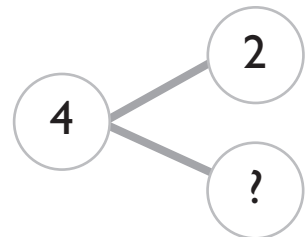
2. What is the missing number?

**A** 3**C** 5**B** 4**D** 6

3. How many marbles does Tom have to place in the box to make 10?

**A** 5**C** 7**B** 6**D** 8

4. What is the missing number?


**A** 2**C** 4**B** 3**D** 5

# Cumulative Test A

## Units 1-2

1. How many balls are there?

Check  the correct answer.




Four    Five    Eight


2. How many clowns are there?

Write the number in words.

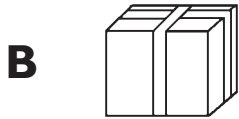


\_\_\_\_\_

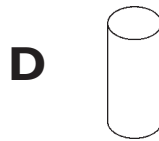

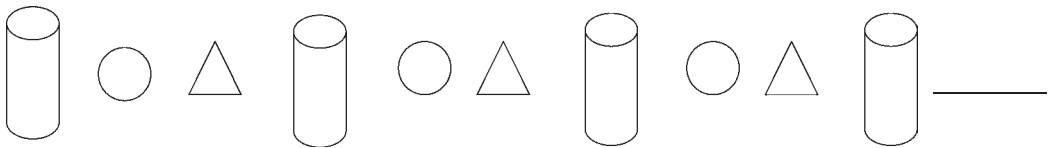
3. Color the correct number of cups.



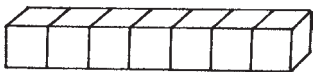
9. Which one of these objects has flat surfaces **only**?



10. These objects are placed in a regular pattern.  
Which object comes next?



11. The fork is about \_\_\_\_\_ long.



**A** 5

**C** 7

**B** 6

**D** 9

12. Which straw is the longest?

**A** Straw P

**C** Straw R

**B** Straw Q

**D** Straw S

