

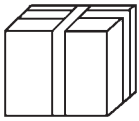

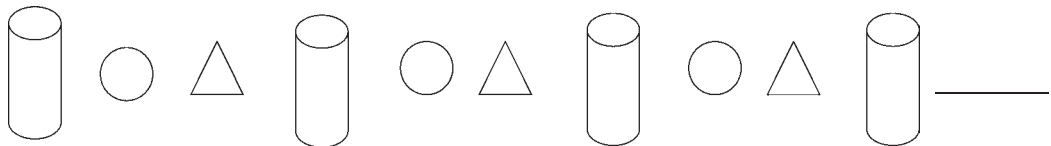
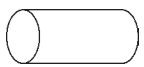





9. Which one of these objects has flat surfaces **only**?

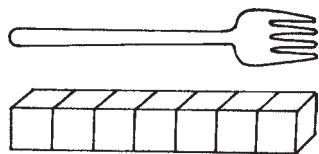
- A**  **C** 
- B**  **D** 

10. These objects are placed in a regular pattern.
Which object comes next?







- A**  **C** 
- B**  **D** 

11. The fork is about _____  long.



- A** 5 **C** 7
- B** 6 **D** 9

12. Which straw is the longest?

- A** Straw P **C** Straw R  P
- B** Straw Q **D** Straw S  Q
-  R
-  S