



REVIEW 5

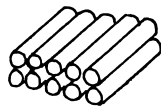
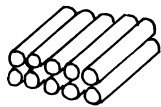
1. Add.

(a)



$$10 + 5 =$$

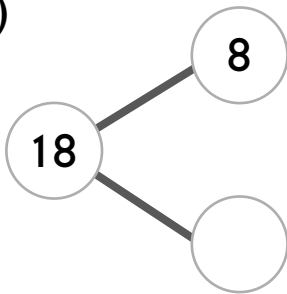
(b)



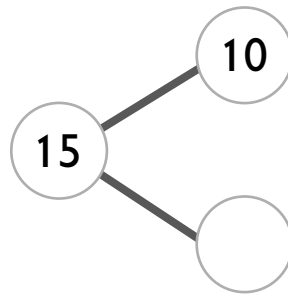
$$10 + 10 =$$

2. Fill in the missing numbers.

(a)



(b)




(c) 14 is _____ and 4.

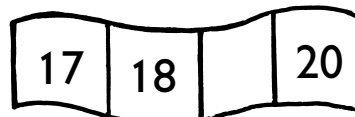
(d) 12 is 10 and _____.

3. Fill in the missing numbers.


(a)



(b)



(c)



(d)

