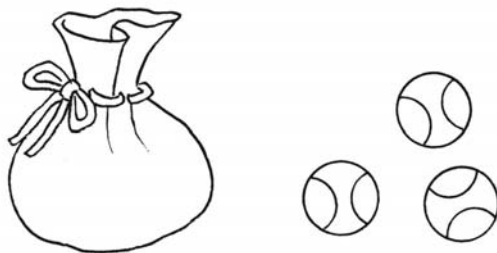


EXERCISE 12

1.




There are 4 balls in the bag.

How many balls are there altogether?

$$\boxed{4} \bigcirc \boxed{} = \boxed{}$$

There are balls altogether.

2.



There are 10 pencils altogether.

How many pencils are there in the box?



$$\boxed{10} \bigcirc \boxed{} = \boxed{}$$

There are pencils in the box.

REVIEW 5

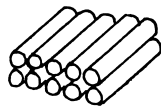
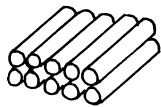
1. Add.

(a)



$$10 + 5 =$$

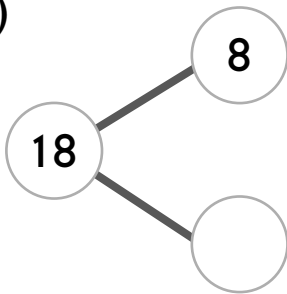
(b)



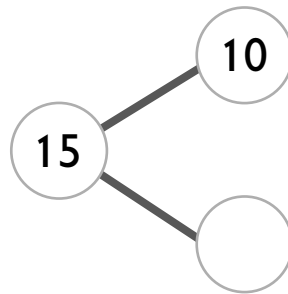
$$10 + 10 =$$

2. Fill in the missing numbers.

(a)



(b)




(c) 14 is _____ and 4.

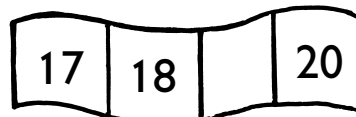
(d) 12 is 10 and _____.

3. Fill in the missing numbers.


(a)




(b)



(c)





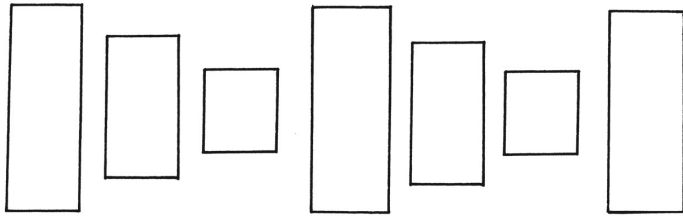
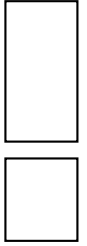
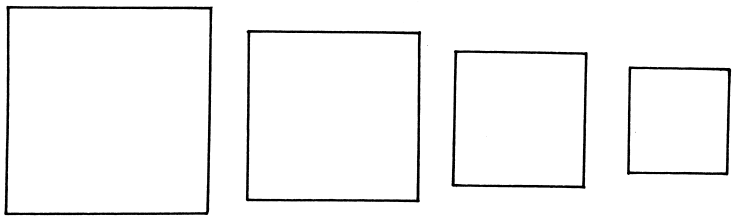
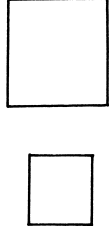
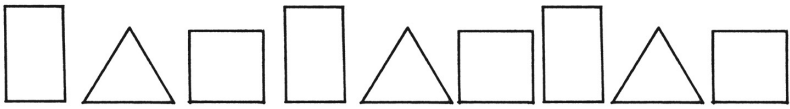
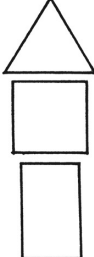
(d)



EXERCISE 6

1. Study each regular pattern.

Then color the shape that comes next.

<p>(a)</p> 	
<p>(b)</p> 	
<p>(c)</p> 	
<p>(d)</p> 	
<p>(e)</p> 